

Prior learning links

The angles on a straight line sum to ___

The angles round a point sum to ___

$$180 - 57 =$$

$$180 - 20 - 35 =$$

List three quadrilaterals

Key Vocabulary

Sum:

Polygon:

Scalene triangle:

Isosceles triangle:

Right-angled triangle:

Acute Angle:

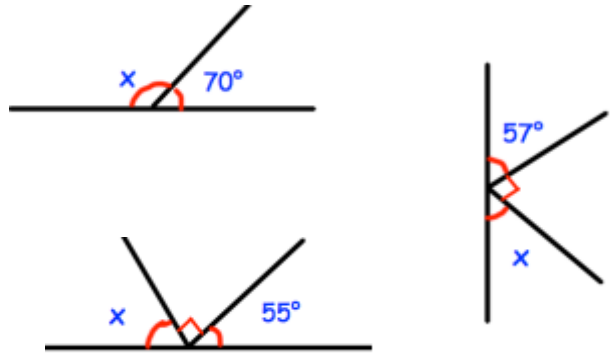
Obtuse Angle:

Reflex Angle:

Write a definition or draw a diagram to show the meaning of these key words

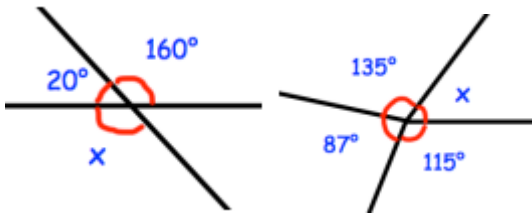
Angles on a straight line

Calculate the size of the missing angles.



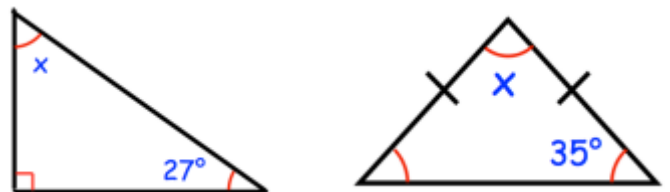
Angles round a point

Calculate the size of the missing angles.

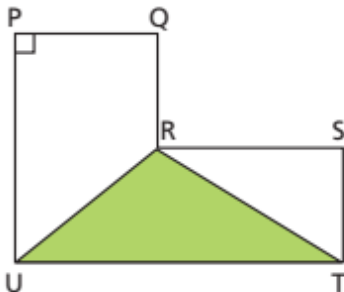


Angles in a triangle

Calculate the size of the missing angles.



Angle notation



Complete the sentences:

Shape RST is a _____

PU is a _____

Angle _____ is a right angle

Within the shape there are two trapeziums. Describe the trapeziums using letters.

Angles in a quadrilateral

Calculate the size of the missing angles.

